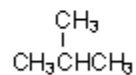
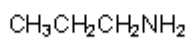
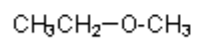
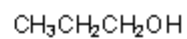
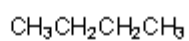
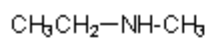


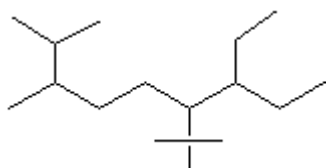
Quiz 8

1. Place the molecules below in order of increasing boiling point (1=lowest, 6=highest).



2. Give the IUPAC name for the compound below.

a.



b. $(\text{CH}_3)_2\text{CH}(\text{CH}_2)_3\text{CH}(\text{CH}_3)_2$